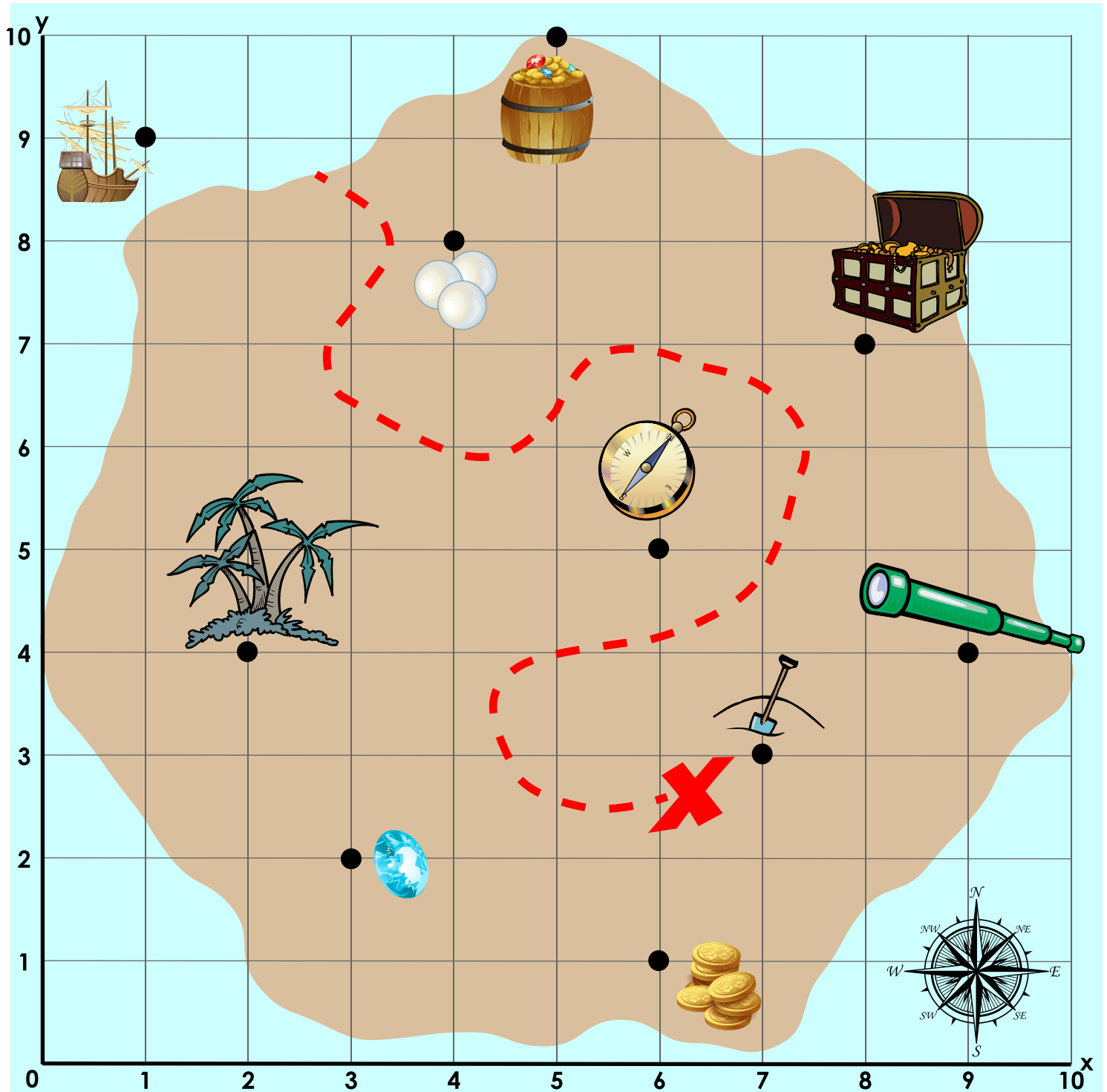


Name: \_\_\_\_\_

# Coordinate Grid Treasure Map


Below is a pirate map drawn as a coordinate grid.



Name: \_\_\_\_\_

# Coordinate Grid Treasure Map

Write the coordinates for each object on the map. Write the coordinates as  $(x, y)$ .



telescope

---



shovel

---



pirate ship

---



diamond

---




gold coins

---



treasure chest

---



pearls

---



palm trees

---



compass

---




barrel of treasure

---

# ANSWER KEY

## Coordinate Grid Treasure Map

Write the coordinates for each object on the map. Write the coordinates as (x, y).



telescope

(9, 4)



shovel

(7, 3)



pirate ship

(1, 9)



diamond

(3, 2)




gold coins

(6, 1)



treasure chest

(8, 7)



pearls

(4, 8)



palm trees

(2, 4)



compass

(6, 5)



barrel of treasure

(5, 10)